

## SECTION A : 80 MARKS

## BAHAGIAN A : 80 MARKAH

## INSTRUCTION:

This section consists of **FOUR (4)** structured questions. Answer **ALL** questions.

## ARAHAN:

Bahagian ini mengandungi **EMPAT (4)** soalan berstruktur. Jawab **SEMUA** soalan.

## QUESTION 1

## SOALAN 1

CLO1  
C2

- (a) Interpret and give **ONE (1)** example of the terms feedback system and periodic signal.

*Tafsirkan dan beri **SATU (1)** contoh untuk terma sistem suapbalik dan isyarat berkala.*

[5 marks]

[5 markah]

CLO1  
C2

- (b) Illustrate the odd signal of the Figure A1b(i) and the even signal of the Figure A1b(ii).

*Gambarkan isyarat ganjil bagi Rajah A1b(i) dan isyarat genap bagi Rajah A1b(ii)*

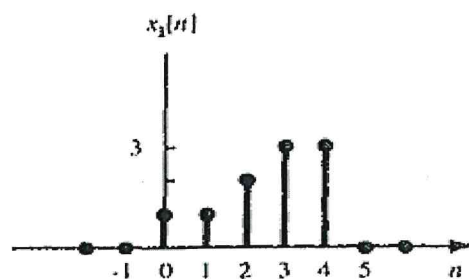


Figure A1b(i) / Rajah A1b(i)

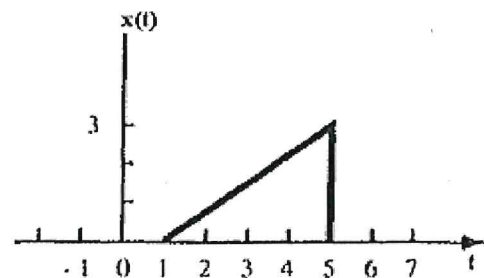


Figure A1b(ii) / Rajah A1b(ii)

[5 marks]

[5 markah]

CLO1  
C3

(c) The Figure A1(c) is a continuous time signal  $x(t)$ . Plot each of the following signals,  $x(t)[u(t + 1) - u(t - 1)]$  and  $x(t) \delta(t - 3/2)$ .

*Rajah A1c ialah isyarat selanjar  $x(t)$ . Plotkan bagi isyarat yang berikut,  $x(t)[u(t + 1) - u(t - 1)]$  and  $x(t) \delta(t - 3/2)$ .*

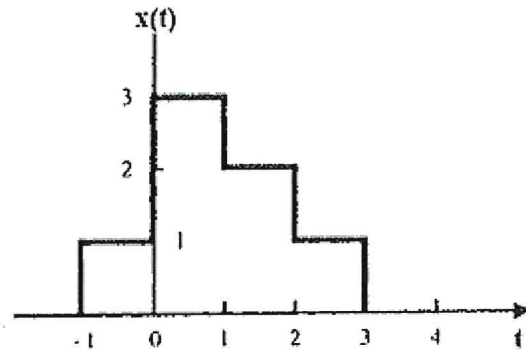


Figure A1(c)/ Rajah A1(c)

[10 marks]  
[10 markah]

**QUESTION 2**  
**SOALAN 2**

CLO1  
C2

(a) The Figure A2(a) is a special class of a great system. Explain the input-output relationship for the block diagram of LTI systems.

*Rajah A2(a) ialah pengkelasan khas bagi sistem unggul. Nyatakan hubungan masukan-keluaran untuk rajah blok bagi sistem LTI.*

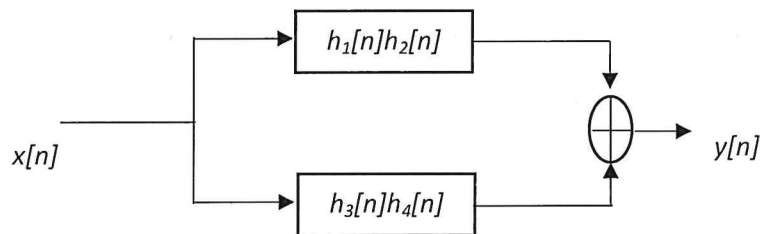


Figure A2(a)/ Rajah A2(a)

[5 marks]  
[5 markah]

CLO1  
C2

(b) Express the convolution in the time range from 0 to  $t$  if  $h(t) = e^{-at} u(t)$  and  $x(t) = u(t)$ .

*Ungkapkan hasil konvolusi bagi julat masa 0 hingga  $t$  jika  $h(t) = e^{-at} u(t)$  dan  $x(t) = u(t)$ .*

[5 marks]  
[5 markah]

CLO1  
C3

(c) The impulse response of a discrete time LTI signal as given. Sketch the output of this system if the input signal as below.

*Sambutan denyut bagi isyarat masa diskrit LTI seperti yang diberikan. Lakarkan keluaran sistem ini jika isyarat masukan seperti di bawah.*

$$h[n] = 2\delta[n+3] + 2\delta[n] + \delta[n-1]$$

$$x[n] = \delta[n] + 3\delta[n-1] - 2\delta[n-2]$$

[10 marks]  
[10 markah]

### QUESTION 3

#### SOALAN 3

CLO1  
C2

(a) Explain the input signal  $x[n] = 2^n u[n] - 3^n u[-n-1]$  to the Z – transform and locate the region of convergences (ROCs).

*Jelaskan isyarat masukan  $x[n] = 2^n u[n] - 3^n u[-n-1]$  kepada Jelmaan Z dan dapatkan kawasan pencapahan (ROCs).*

[4 marks]  
[4 markah]

CLO1  
C3

(b) Solve  $y[n] = x[n]*h[n]$  if  $x[n]$  and  $h[n]$  as given by using the analytical technique.

*Selesaikan  $y[n] = x[n]*h[n]$  jika diberi  $x[n]$  dan  $h[n]$  seperti yang dinyatakan dengan menggunakan teknik analitik.*

$$x[n] = \delta[n] + \delta[n-1] + \delta[n-2] + \delta[n-3]$$

$$h[n] = \delta[n] + \delta[n-1] + \delta[n-2]$$

[8 marks]  
[8 markah]

CLO1  
C3

(c) Consider the LTI signal,  $x(t) = e^{-2t} u(t) + e^{-3t} u(t)$ . Calculate the Laplace Transform  $X(s)$  and sketch the zero-pole with the ROC for that signal.

*Andai isyarat,  $x(t) = e^{-2t} u(t) + e^{-3t} u(t)$ . Kira Jelmaan Laplace  $X(s)$  dan lakarkan kutub-sifar dengan ROC bagi isyarat itu.*

[8 marks]  
[8 markah]

**QUESTION 4**  
**SOALAN 4**

CLO1  
C2

a) Detail the Fourier series coefficients for the signal of  $x(t) = \sin \omega_0(t)$ .

*Dapatkan pekali siri Fourier bagi isyarat  $x(t) = \sin \omega_0(t)$ .*

[4 marks]  
[4 markah]

CLO1  
C3

(b) Calculate a Fourier transform for the signal  $x(t) = e^{-3|t|} \sin 2t$  by using the Fourier transform table.

*Hitung Jelmaan Fourier bagi isyarat  $x(t) = e^{-3|t|} \sin 2t$  menggunakan Jadual Jelmaan Fourier.*

[8 marks]  
[8 markah]

CLO1  
C3

(c) A transmission signal consists of a pulse-width modulation signal  $v(t) = V_1(t) \cos \omega_c t$ . Solve the Fourier transform for the following signal.

*Isyarat penghantaran mempunyai isyarat pemodulatan lebar  $v(t) = V_1(t) \cos \omega_c t$ .*

*Selesaikan jelmaan Fourier bagi isyarat tersebut.*

[8 marks]  
[8 markah]

**SECTION B : 20 MARKS****BAHAGIAN B : 20 MARKAH****INSTRUCTION:**

This section consists of **ONE (1)** essay question. Answer the question.

**ARAHAN:**

*Bahagian ini mengandungi SATU (1) soalan esei. Jawab soalan tersebut.*

**QUESTION 1****SOALAN 1**CLO1  
C5

The volumes and frequencies in a musical chord is an example of Fourier Transform.

Continuous Time Linear Invariant (LTI) as  $\frac{dy(t)}{dt} + 2y(t) = x(t)$ . Evaluate the output  $y(t)$  if the input is  $x(t) = e^t u(t)$ .

*Magnitud dan frekuensi suara dalam kod muzik adalah salah satu contoh Jelmaan*

*Fourier. Isyarat berterusan (LTI) sebagai  $\frac{dy(t)}{dt} + 2y(t) = x(t)$ . Nilaiikan keluaran*

*$y(t)$  jika masukan ialah  $x(t) = e^t u(t)$ .*

[20 marks]  
[20 markah]

**SOALAN TAMAT**

## FORMULA FOR DEE40113 SIGNAL AND SYSTEM

### LAPLACE TRANSFORM PAIRS

$f(t)$	$F(s)$
$\delta(t)$	1
$u(t)$	$\frac{1}{s}$
$a$	$\frac{a}{s}$
$t^n, n=1,2,3,\dots$	$\frac{n!}{s^{n+1}}$
$e^{at}$	$\frac{1}{s-a}$
$\sin at$	$\frac{a}{s^2 + a^2}$
$\cos at$	$\frac{s}{s^2 + a^2}$
$\sin(at + \theta)$	$\frac{s \sin \theta + a \cos \theta}{s^2 + a^2}$
$\cos(at + \theta)$	$\frac{s \cos \theta - a \sin \theta}{s^2 + a^2}$
$e^{-at} \sin bt$	$\frac{b}{(s+a)^2 + b^2}$
$e^{-at} \cos bt$	$\frac{s+a}{(s+a)^2 + b^2}$
$t^n e^{-at}$	$\frac{n!}{(s+a)^{n+1}}$
$\sinh at$	$\frac{a}{s^2 - a^2}$
$\cosh at$	$\frac{s}{s^2 - a^2}$

## FORMULA FOR DEE40113 SIGNAL AND SYSTEM

## Z TRANSFORM PAIRS

$x(t)$	$X(s)$	$X(z)$
$\delta(t) = \begin{cases} 1 & t=0 \\ 0 & t=kT, k \neq 0 \end{cases}$	1	1
$\delta(t - kT) = \begin{cases} 1 & t=kT \\ 0 & t \neq kT \end{cases}$	$e^{-ks}$	$Z^{-k}$
$u(t)$ , unit step	$\frac{1}{s}$	$\frac{z}{z-1}$
$t$	$\frac{1}{s^2}$	$\frac{Tz}{(z-1)^2}$
$t^2$	$\frac{2}{s^3}$	$\frac{T^2 z(z+1)}{(z-1)^3}$
$e^{-at}$	$\frac{1}{s+a}$	$\frac{z}{z-e^{-aT}}$
$1 - e^{-at}$	$\frac{a}{s(s+a)}$	$\frac{(1 - e^{-aT})z}{(z-1)(z - e^{-aT})}$
$te^{-at}$	$\frac{1}{(s+a)^2}$	$\frac{Tze^{-aT}}{(z - e^{-aT})^2}$
$t^2 e^{-at}$	$\frac{2}{(s+a)^3}$	$\frac{T^2 e^{-aT} z(z + e^{-aT})}{(z - e^{-aT})^3}$
$\sin \omega t$	$\frac{\omega}{s^2 + \omega^2}$	$\frac{z \sin \omega T}{z^2 - 2z \cos \omega T + 1}$
$\cos \omega t$	$\frac{s}{s^2 + \omega^2}$	$\frac{z(z - \cos \omega T)}{z^2 - 2z \cos \omega T + 1}$
$e^{-at} \sin \omega t$	$\frac{\omega}{(s+a)^2 + \omega^2}$	$\frac{(ze^{-aT} \sin \omega T)}{z^2 - 2ze^{-aT} \cos \omega T + e^{-2aT}}$
$e^{-at} \cos \omega t$	$\frac{s+a}{(s+a)^2 + \omega^2}$	$\frac{(z^2 - ze^{-aT} \cos \omega T)}{z^2 - 2ze^{-aT} \cos \omega T + e^{-2aT}}$

## FORMULA FOR DEE40113 SIGNAL AND SYSTEM

### FOURIER TRANSFORM PAIRS

$f(t)$	$F(\omega)$
$\delta(t)$	1
1	$2\pi\delta(\omega)$
$u(t)$	$\pi\delta(\omega) + \frac{1}{j\omega}$
$u(t+\tau) - u(t-\tau)$	$2 \frac{\sin \omega\tau}{\omega}$
$ t $	$\frac{-2}{\omega^2}$
$\text{sgn}(t)$	$\frac{2}{j\omega}$
$e^{-at}u(t)$	$\frac{1}{a+j\omega}$
$e^{-at}u(-t)$	$\frac{1}{a-j\omega}$
$t^n e^{-at}u(t)$	$\frac{n!}{(a+j\omega)^{n+1}}$
$e^{-a t }$	$\frac{2a}{a^2 + \omega^2}$
$e^{j\omega_0 t}$	$2\pi\delta(\omega - \omega_0)$
$\sin \omega_0 t$	$j\pi[\delta(\omega + \omega_0) - \delta(\omega - \omega_0)]$
$\cos \omega_0 t$	$\pi[\delta(\omega + \omega_0) + \delta(\omega - \omega_0)]$
$\sin(\omega t + \theta)$	$\frac{s \sin \theta + \omega \cos \theta}{s^2 + \omega^2}$
$\cos(\omega t + \theta)$	$\frac{s \cos \theta - \omega \sin \theta}{s^2 + \omega^2}$
$e^{-at} \sin \omega_0 t u(t)$	$\frac{\omega_0}{(a+j\omega)^2 + \omega_0^2}$
$e^{-at} \cos \omega_0 t u(t)$	$\frac{a+j\omega}{(a+j\omega)^2 + \omega_0^2}$